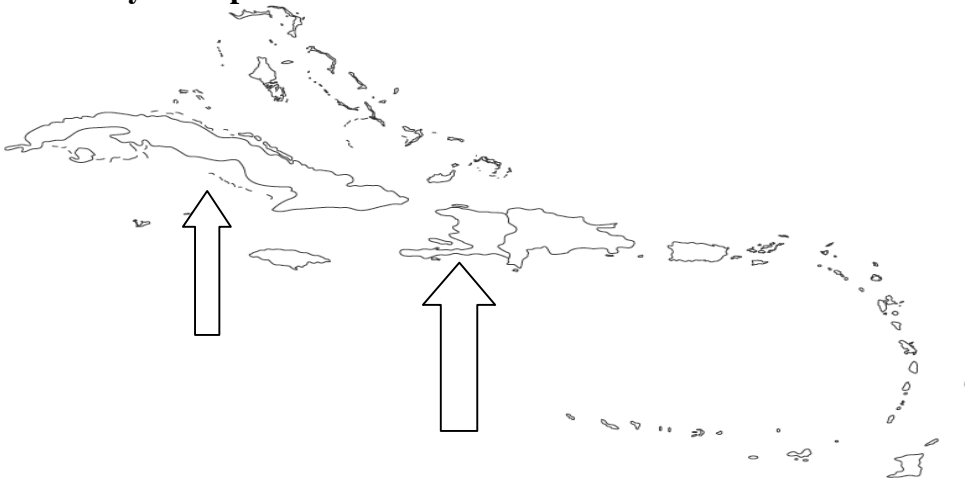


MORE MIDTERM REVIEW

AMERICAS

1. _____ experienced inflation because of the gold/silver coming from the Americas during the Exploration Age. Unit 4
2. These 2 items : _____ and _____ came from the Old World and changed people's lives in the Americas.
3. Identify these places with arrows



Latin America



This is a royalty free image that can be used for your personal, corporate or education projects.
It can not be resold or freely distributed, if you need an editable PowerPoint or Adobe Illustrator
version of this map please visit www.bjdesign.com or www.mapsfordesign.com.

5. This religion unified the Ottoman Empire _____
6. What 3 continents today is Christianity located in?
7. What 2 items came into Africa from the New World-clue food products? Unit 5
8. This family in the HRE supported the Catholics _____. Unit 3
9. Who were the 2 dissenters (unhappy with the Catholic Church) before Martin Luther? _____ and _____. Unit 3 Clue-1 was executed.
10. Who was the Sun King and built Versailles? _____ Unit 6
11. In the Glorious Reformation-these 2 became King and Queen of England? Unit 6
12. In Japan, during Global trade period, the Emperor was powerless-this was the military leader _____. Unit 5
13. From Unit 6-this was a technological advance-improved transportation and trade _____. Clue-part of A.W.I.N mnemonic
14. What was the long river in western Europe used for trade to the Black Sea? Clue-starts with a D.
15. Unit-9-fill in characteristics:
Conservatives Liberals
16. Latin American Countries sought independence from these 3 mother countries in Europe. Unit 7
17. Who carried Buddhism to Asia from India-Clue starts with an A? Unit 1
18. Peter the Great _____ Russia. Unit 6. Clue starts with a W.
19. This document in England stated that monarchs must get support of Parliament for actions. Unit 6
20. What did Charles I do that got him executed? Unit 6
21. Which Enlightenment philosopher felt a strong monarch was needed to control people? Unit 6

22.Napoleon wanted to _____ Europe under French control. Unit 8

23.What was the class structure that Europeans brought to Latin America? Unit 7

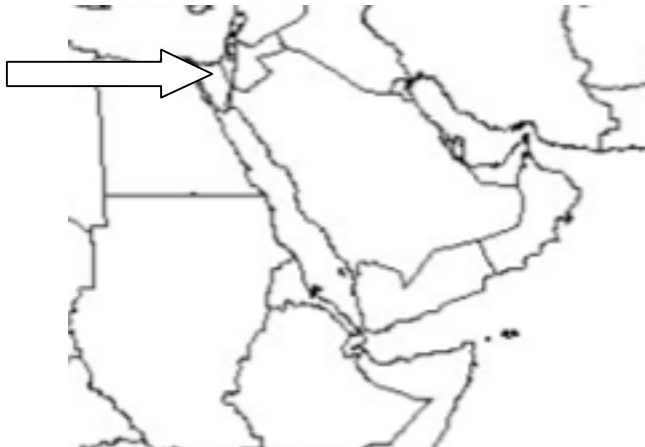
24.Memorize this:

During the period of Imperialism-Industrially-produced goods flooded colonial markets and displaced their traditional industries.

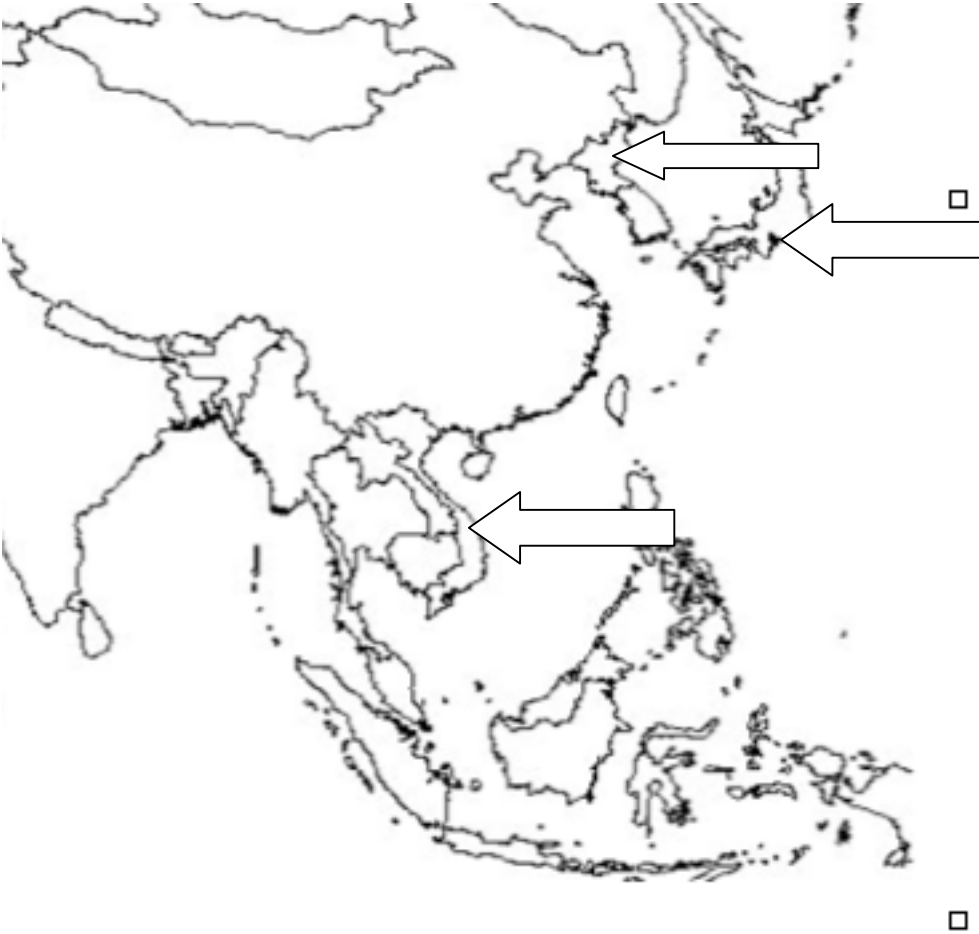
25. What was this Empire called and what religion is mainly there?



26.A canal was built here-label everything- look at world map



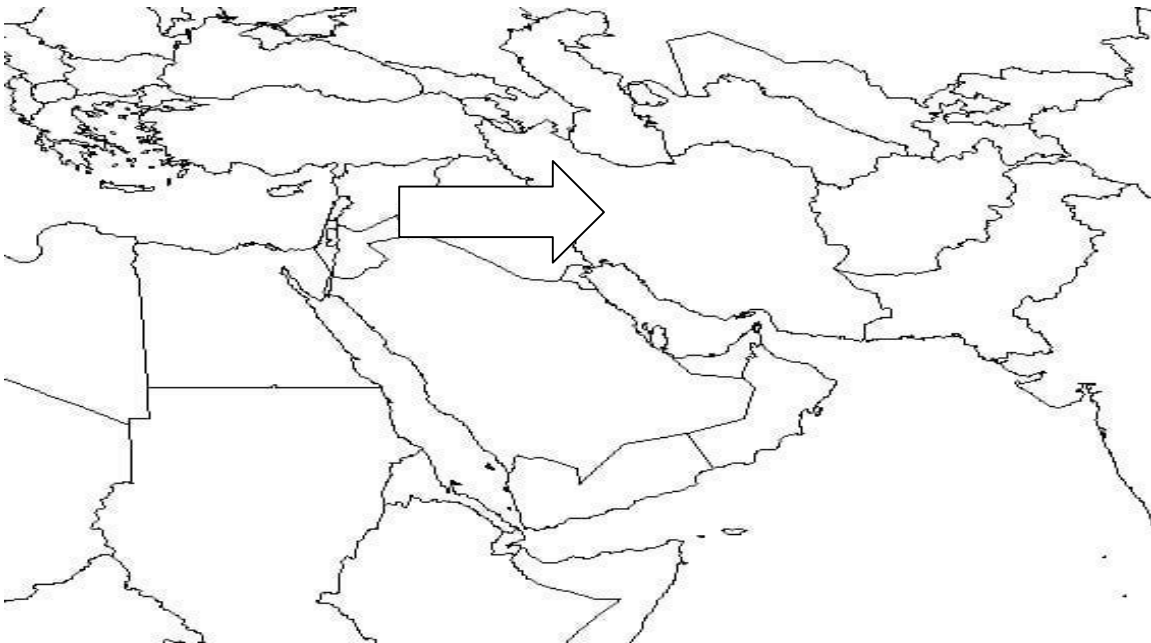
27. This is called what all together???? What are the areas with the arrows called?



28. What was this Empire called-label the seas also?



29. Name this empire _____ today it is _____.



30. This was called _____ Minor or Anatolia and was the original location of the _____ Empire.

